

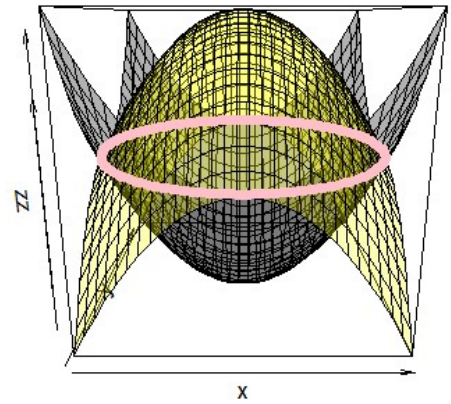
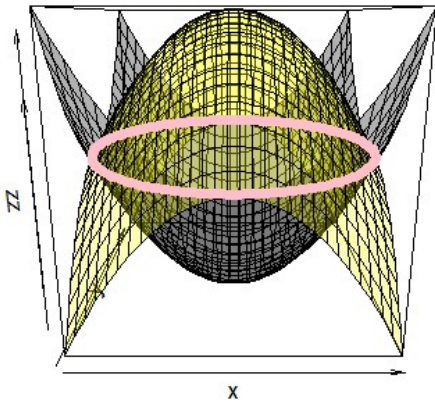
Find the volume between the surfaces: $z = x^2 + y^2 - 9$, $z = 16 - x^2 - y^2$

Need to find region over which to integrate:

Find intersection between surfaces: $x^2 + y^2 - 9 = 16 - x^2 - y^2$

Hence intersection is $2x^2 + 2y^2 = 25$

Thus (per figure) integrating over region $x^2 + y^2 \leq \frac{25}{2}$



Height of columns: $16 - x^2 - y^2 - (x^2 + y^2 - 9) = 25 - 2x^2 - 2y^2$

Thus need to integrate $\int \int_R (25 - 2x^2 - 2y^2) dA$

Note: this integral is easier to compute using polar coordinates:

Height of columns: $25 - 2x^2 - 2y^2 = 25 - 2r^2$

Region: $x^2 + y^2 \leq \frac{25}{2}$ is equivalent to $0 \leq r \leq \frac{5}{\sqrt{2}}$ and $0 \leq \theta \leq 2\pi$

Hence $\int \int_R (25 - 2x^2 - 2y^2) (dA) = \int_0^{2\pi} \int_0^{\frac{5}{\sqrt{2}}} (25 - 2r^2) (r dr d\theta)$

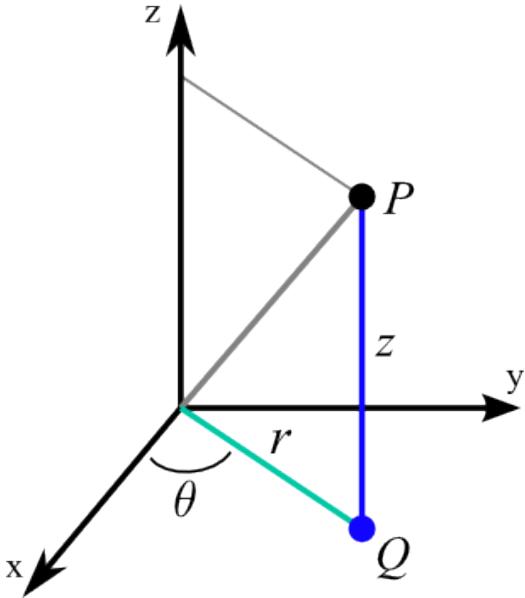
$$= \int_0^{\frac{5}{\sqrt{2}}} \int_0^{2\pi} (25r - 2r^3) d\theta dr = \int_0^{\frac{5}{\sqrt{2}}} \int (25r - 2r^3) \theta \Big|_0^{2\pi} dr = \int_0^{\frac{5}{\sqrt{2}}} (25r - 2r^3) (2\pi) dr$$

$$= (2\pi) \left(\frac{25}{2} r^2 - \frac{2}{4} r^4 \right) \Big|_0^{\frac{5}{\sqrt{2}}} = (\pi) \left[25 \left(\frac{5}{\sqrt{2}} \right)^2 - \left(\frac{5}{\sqrt{2}} \right)^4 \right] = (\pi) \left[25 \left(\frac{5^2}{2} \right) - \left(\frac{5^4}{4} \right) \right]$$

$$= (\pi) \left[\frac{2(5^4) - 5^4}{4} \right] = (\pi) \left[\frac{5^4}{4} \right] = \frac{625\pi}{4}$$

11.8: Cylindrical coordinates and Spherical coordinates

Cylindrical coordinates:



Spherical coordinates:

$$\begin{aligned}x &= \rho \sin \phi \cos \theta \\y &= \rho \sin \phi \sin \theta \\z &= \rho \cos \phi.\end{aligned}\tag{1}$$

