



Either circle your answers or place on answer line.

[1] 1.) Graph $y = e^x$



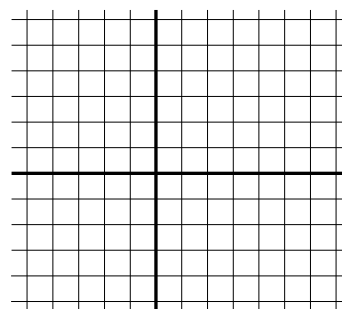
exponential growth

[1] 2.) Graph $y = e^{-x}$



exponential decay

[1] 3.) Graph $y = \ln(x)$



logarithmic growth

[1] 4.) $\ln(0) = \underline{\hspace{2cm}}$ [1] 5.) $\ln(1) = \underline{\hspace{2cm}}$ [1] 6.) $\ln(e^2) = \underline{\hspace{2cm}}$ [1] 7.) $\ln(-1) = \underline{\hspace{2cm}}$

8.)

etc.