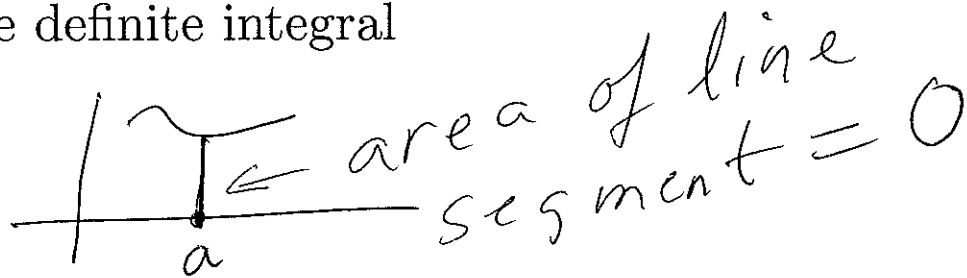


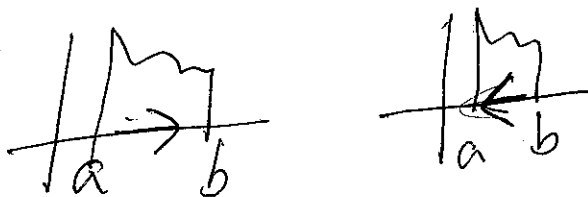
5.4

Properties of the definite integral

$$\int_a^a f(x) dx = 0$$



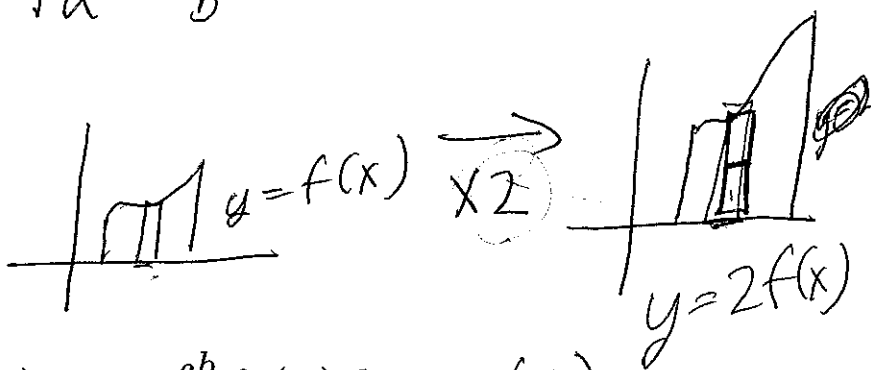
$$\int_a^b f(x) dx = -\int_b^a f(x) dx$$



used

$$\int_a^b k f(x) dx = k \int_a^b f(x) dx$$

$$\int_a^b \underbrace{\left[\frac{1}{2} f(x_i) \right]}_{\text{height}} \underbrace{dx}_{\text{width}}$$



$$\int_a^b (f_1 + f_2)(x) dx = \int_a^b f_1(x) dx + \int_a^b f_2(x) dx$$

$$(f_1(x_1) + f_2(x_1)) dx$$

we will use later
to day
& have used for
piecewise defined
fns

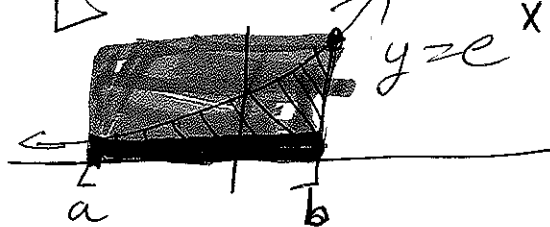
$$\int_a^c f(x) dx = \int_a^b f(x) dx + \int_b^c f(x) dx$$



If $f_1(x) \leq f_2(x)$, then $\int_a^b f_1(x) dx \leq \int_a^b f_2(x) dx$

larger height \Rightarrow larger ^{net} area

If $m \leq f(x) \leq M$ then $m(b-a) \leq \int_a^b f(x) dx \leq M(b-a)$



$$e^a (b-a) \leq \text{area} \leq e^b (b-a)$$


height width

$$\int_a^b f(x) dx = \text{net area btwn}$$

$y = f(x)$ $\left[\begin{array}{l} \text{X-axis} \\ y=0 \end{array} \right]$

$x = a, x = b$

$$\lim_{n \rightarrow \infty} \sum_{i=1}^n f(x_i) \Delta x$$



FYI

Find the area between the curve $y^2 = 2x - 2$ and $y = x - 5$.

Use vertical rectangles:

1.) Find points of intersection between the two curves.

$$y^2 = 2x - 2 \text{ and } y = x - 5.$$

$$(x - 5)^2 = 2x - 2$$

$$x^2 - 10x + 25 = 2x - 2$$

$$x^2 - 12x + 27 = 0$$

$$(x - 3)(x - 9) = 0. \text{ Hence } x = 3, 9.$$

2.) Determine which is larger.

$$\text{Between 1 and 3: } \sqrt{2x - 2} > -\sqrt{2x - 2}$$

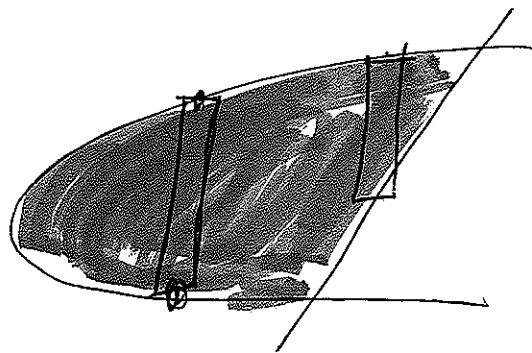
$$\text{Between 3 and 9: } \sqrt{2x - 2} > x - 5$$

3.) Write as integral(s)

Note that between 1 and 3, the height of the rectangles is $\sqrt{2x - 2} - (-\sqrt{2x - 2})$ and the width is dx .

Note that between 3 and 9, the height of the rectangles is $\sqrt{2x - 2} - (x - 5)$ and the width is dx .

$$\int_1^3 [\sqrt{2x - 2} - (-\sqrt{2x - 2})] dx + \int_3^9 [\sqrt{2x - 2} - (x - 5)] dx$$



4.) Evaluate the integral

$$\int_1^3 [2\sqrt{2x-2}] dx + \int_3^9 [\sqrt{2x-2} - (x-5)] dx$$
$$= \int_1^3 [2\sqrt{2x-2}] dx + \int_3^9 (\sqrt{2x-2}) dx - \int_3^9 (x-5) dx$$

Let $u = 2x - 2$, $du = 2dx$,

$$x = 1 : u = 2(1) - 2 = 0;$$

$$x = 3 : u = 2(3) - 2 = 4;$$

$$x = 9 : u = 2(9) - 2 = 16$$

$$= \int_0^4 u^{\frac{1}{2}} du + \int_4^{16} \frac{1}{2} u^{\frac{1}{2}} du + \int_3^9 (-x + 5) dx$$

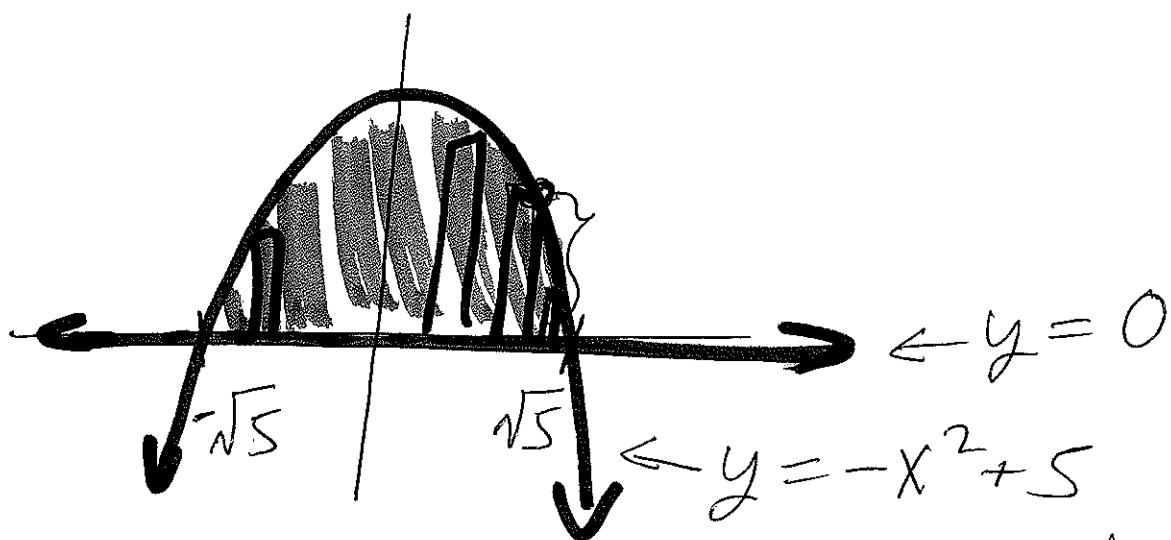
$$= \frac{2}{3} u^{\frac{3}{2}} \Big|_0^4 + \frac{1}{3} u^{\frac{3}{2}} \Big|_4^{16} + \left(-\frac{1}{2} x^2 + 5x\right) \Big|_3^9$$

$$= \frac{2}{3} (4^{\frac{3}{2}} - 0^{\frac{3}{2}}) + \frac{1}{3} (16^{\frac{3}{2}} - 4^{\frac{3}{2}}) + \left(-\frac{1}{2} (9)^2 + 5(9)\right) - \left(-\frac{1}{2} (3)^2 + 5(3)\right)$$

$$= \frac{1}{3} [2(8) + 64 - 8] - \frac{81}{2} + 45 + \frac{9}{2} - 15 = 16$$

$$= \frac{72}{3} - \frac{72}{2} + 30 = 24 - 36 + 30 = 18$$

Ex: Find area bounded
btwn $y = -x^2 + 5$
and $y = 0$ (x-axis)



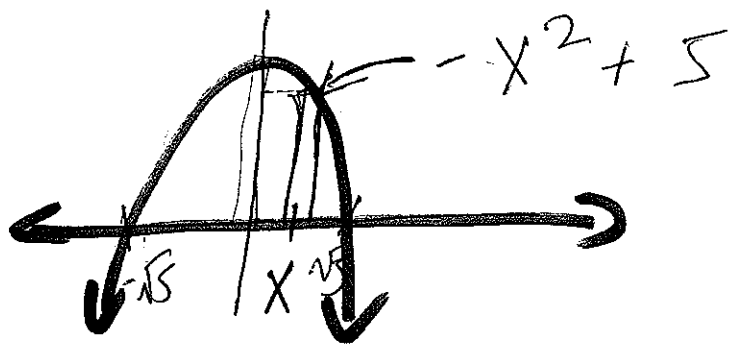
① Find intersection pts
(\Rightarrow same y-value)

$$0 = -x^2 + 5$$

$$x^2 = 5 \Rightarrow x = \pm\sqrt{5}$$


$$\int_{-\sqrt{5}}^{\sqrt{5}} (\text{heights})(\text{widths}) dx$$

③



$$\int_{-\sqrt{5}}^{\sqrt{5}} (-x^2 + 5) dx$$

$$= -\frac{x^3}{3} + 5x \Big|_{-\sqrt{5}}^{\sqrt{5}}$$

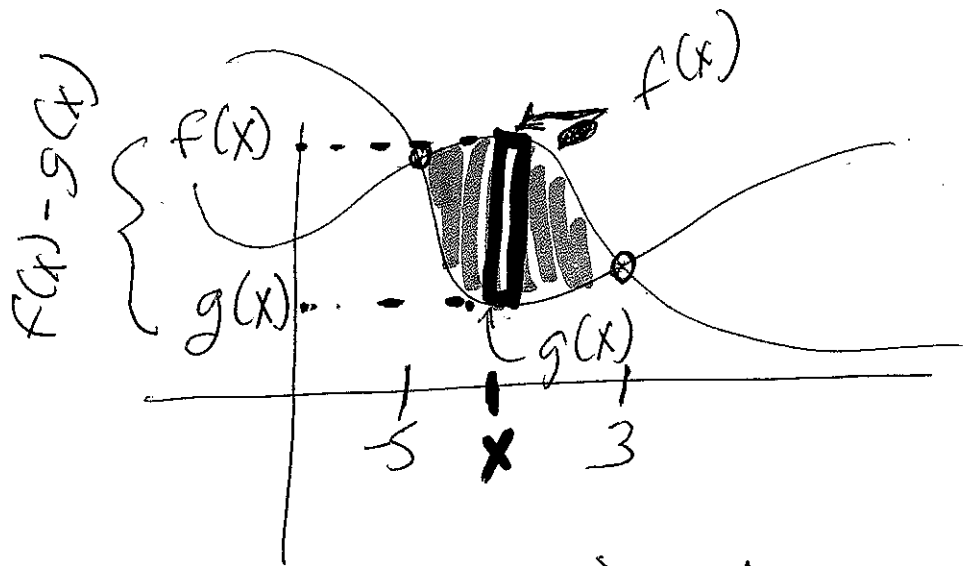


$$\left(\frac{-5\sqrt{5}}{3} + 5\sqrt{5} \right) - \left(\frac{5\sqrt{5}}{3} - 5\sqrt{5} \right)$$

$$= \frac{-10\sqrt{5}}{3} + 10\sqrt{5}$$

$$= \frac{20\sqrt{5}}{3}$$

Find area bounded by
 $y = -x^2 + 5$ & $y = 2x - 10$



height =
larger fn
- smaller fn
on $[-5, 3]$

① Find intercepts
(\Rightarrow same y -value)

$$-x^2 + 5 = 2x - 10$$

$$0 = x^2 + 2x - 15$$

$$0 = (x + 5)(x - 3)$$

$$x = -5, 3$$

$$\int_{-5}^3 (\text{heights}) dx$$

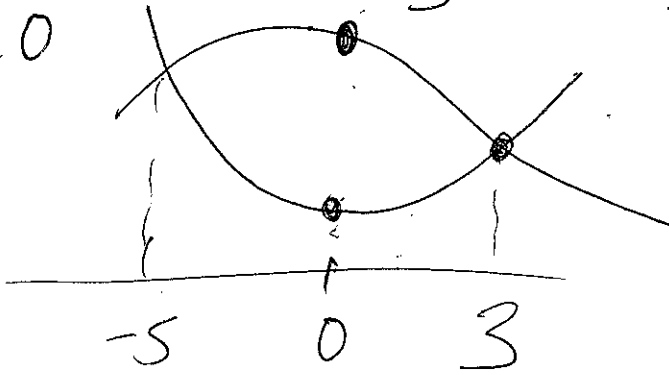
② Determine which fn is larger on $[-5, 3]$

method 1 algebraically

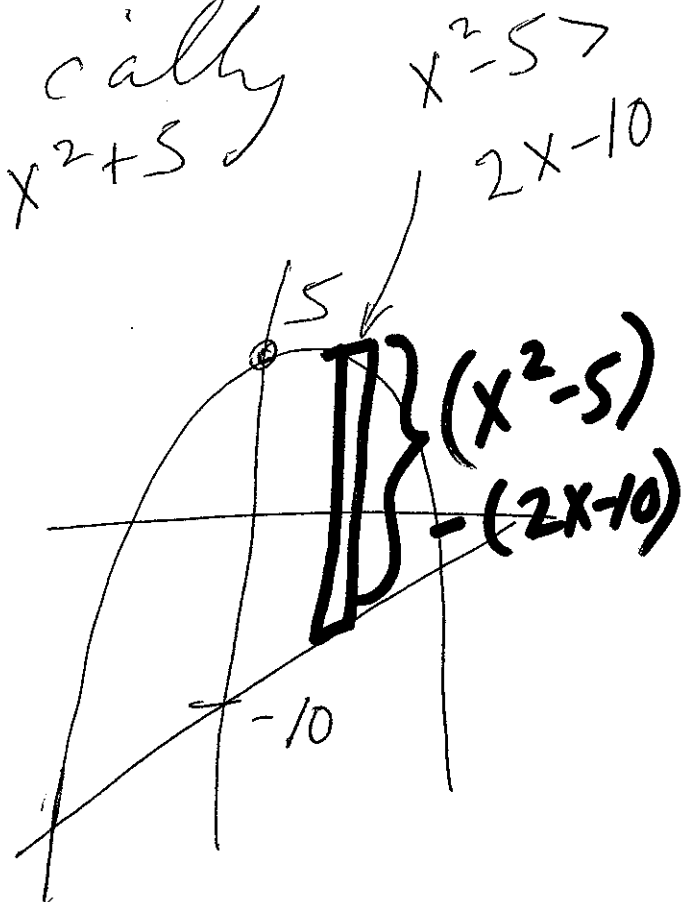
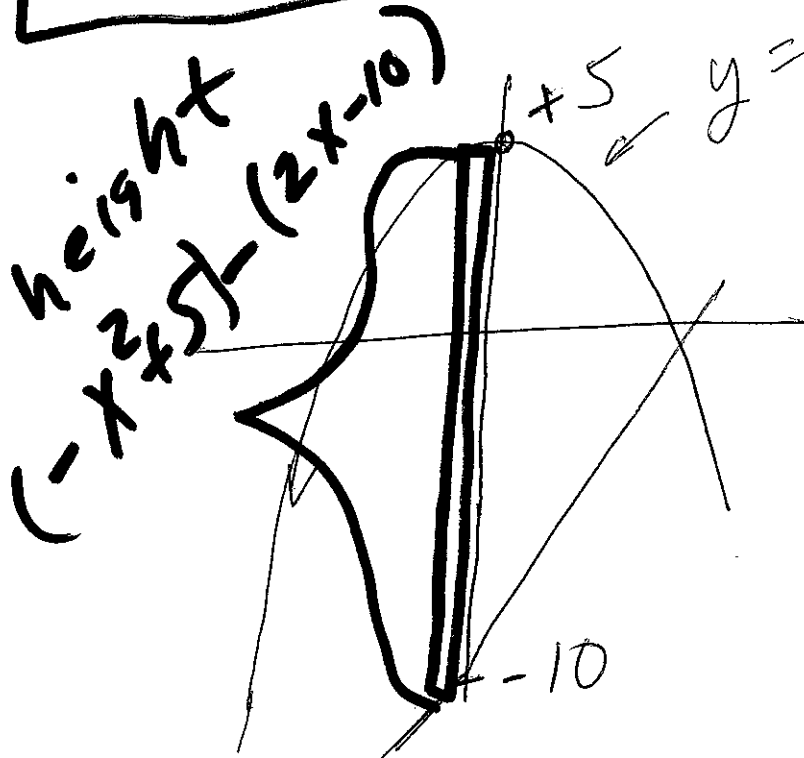
$$-x^2 + 5 > 2x - 10$$

check $x=0$

since $5 > -10$ when $x=0$



method 2 graphically



$$-x^2 + 5 > 2x - 10$$

$$\Rightarrow \text{height} = (-x^2 + 5) - (2x - 10)$$

$$\text{Area} \int_{-5}^3 [(-x^2 + 5) - (2x - 10)] dx$$

height width

Find the area bounded by the functions $y = 2x^3$ and $y = 2x^{\frac{1}{3}}$.

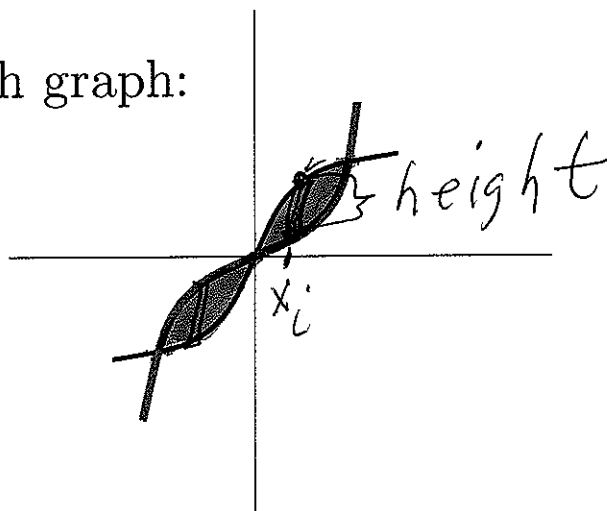
1.) Find points of intersection:

$2x^3 = 2x^{\frac{1}{3}}$ implies $x^3 = x^{\frac{1}{3}}$ implies $x^9 = x$. Thus $x^9 - x = x(x^8 - 1) = 0$.

Hence $x = 0$ and $x^8 - 1 = 0$. $x^8 = 1$ implies $x = 1, -1$

Hence the functions $y = 2x^3$ and $y = 2x^{\frac{1}{3}}$ intersect when $x = -1, 0, 1$

2.) Draw a rough graph:



3.) Find area:

Use vertical rectangles:

$$\int_{-1}^0 [2x^3 - 2x^{\frac{1}{3}}] dx + \int_0^1 [2x^{\frac{1}{3}} - 2x^3] dx$$

Ex: Find area btwn
 $y = 2x^3$ & $y = 2x^{1/3}$

① Find intercepts
(\Rightarrow same y -value)

$$2x^3 = 2x^{1/3}$$

$$x^3 = x^{1/3}$$

$$x^9 = x$$

$$x^9 - x = 0$$

$$x(x^8 - 1) = 0$$

$$x = 0, \quad x^8 - 1 = 0$$

$$x^8 = 1$$

$$x = 0 \quad x = \pm 1 \leftarrow \text{check}$$

$$2(\pm 1)^3 = 2(\pm 1)^{1/3}$$

$$2(0)^3 = 2(0)^{1/3} \checkmark$$

Alternativ

$$x^3 = x^{1/3}$$

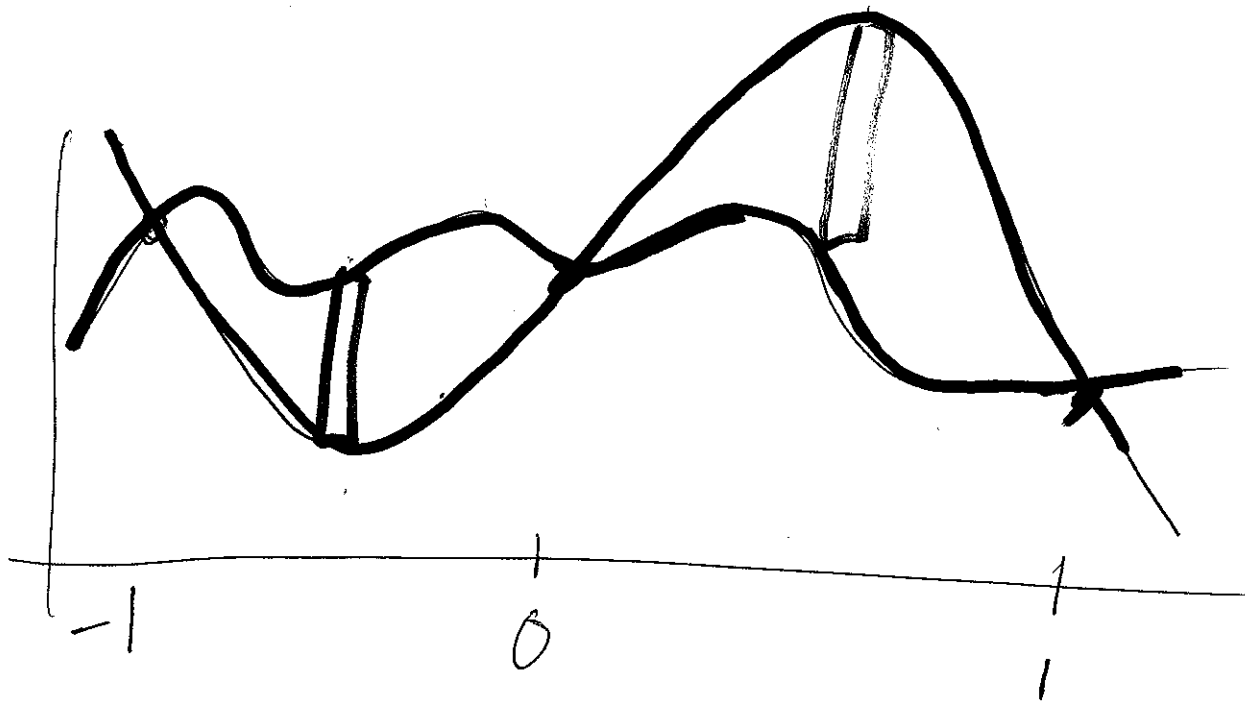
$$x^3 - x^{1/3} = 0$$

$$x^{1/3} (x^{8/3} - 1) = 0$$

$$x = 0$$

$$x^{8/3} = 1 \Rightarrow x = \pm 1$$

② Determine height
Find which fn is larger



Which is larger on

$[-1, 0]$

algebraically

$$2x^3 > 2x^{1/3}$$

$$2\left(-\frac{1}{8}\right)^3 > 2\left(-\frac{1}{8}\right)^{1/3} = -1$$

Which fn is larger on $[0, 1]$

$$2\left(\frac{1}{8}\right)^3 < 2\left(\frac{1}{8}\right)^{1/3} = 1$$

$$2x^3 < 2x^{1/3}$$

$$\int_{-1}^0 [2x^3 - 2x^{1/3}] dx + \int_0^1 [2x^{1/3} - 2x^3] dx = \text{Area}$$

